




Addition within 10

e.g. May has 3 . Linda has 2 . How many  do they have altogether?

$$\underline{3} \oplus \underline{2} = \underline{5} \text{ (oranges)}$$

1 Sam has 3 . Ryan has 3 . How many  do they have altogether?

$$\underline{\quad} \bigcirc \underline{\quad} = \underline{\quad} \text{ (apples)}$$


2 My brother has 4 . Mother gives him 3 more . How many  does he have now?

$$\underline{\quad} \bigcirc \underline{\quad} = \underline{\quad} \text{ (pencils)}$$

Addition within 10

3 I am 7 years old. My sister is 3 years older than me. How old is my sister?

$$\underline{\quad} \bigcirc \underline{\quad} = \underline{\quad} \text{ (years old)}$$



4 Louisa ate 5 . Leo ate 2 . How many  did they eat altogether?



$$\underline{\quad} \bigcirc \underline{\quad} = \underline{\quad} \text{ (sweets)}$$

5 Zoe has \$5. Sophie has \$4. How much do they have altogether?



$$\underline{\quad} \bigcirc \underline{\quad} = \underline{\quad} \text{ (dollars)}$$

Addition within 10



1 I have 3  . My sister has 5  . How many balloons do we have altogether?

_____ ○ _____ = _____ (balloons)



2 My sister has 6  . Mother gives her 2 more  . How many  does she have now?

_____ ○ _____ = _____ (sweets)

3 A  costs \$5. Dad buys 2  . How much does he pay in total?

_____ ○ _____ = _____ (dollars)



Addition within 10

4 I am 3 years old. My brother is 6 years older than me. How old is my brother?

$$\underline{\quad} \bigcirc \underline{\quad} = \underline{\quad} \text{ (years old)}$$



5 Steve ate 2 . Peter ate 4 . How many  did they eat altogether?

$$\underline{\quad} \bigcirc \underline{\quad} = \underline{\quad} \text{ (cupcakes)}$$

6 Ada has \$6. Sophia has \$4. How much do they have altogether?






$$\underline{\quad} \bigcirc \underline{\quad} = \underline{\quad} \text{ (dollars)}$$






Subtraction within 10

e.g.

Mrs. Chan bought 10 . 2  were broken. How many  were in good condition?

$$\underline{10} \ominus \underline{2} = \underline{8} \text{ (eggs)}$$

1

There are 6 . Toby eats 2 . How many  are left?

$$\underline{\quad} \ominus \underline{\quad} = \underline{\quad} \text{ (eggtarts)}$$

2

There are 7 . My sister and brother eat 3 . How many  are left?


$$\underline{\quad} \ominus \underline{\quad} = \underline{\quad} \text{ (buns)}$$



Subtraction within 10

3 I am 8 years old. My little sister is 3 years younger than me. How old is my little sister?

$$\underline{\quad} \bigcirc \underline{\quad} = \underline{\quad} \text{ (years old)}$$



4 I have 9 . Lucy has 2 fewer  than me. How many  does Lucy have?

$$\underline{\quad} \bigcirc \underline{\quad} = \underline{\quad} \text{ (sweets)}$$

5 Grace has \$9. Louis has \$3 less than Grace. How much does Louis have?

$$\underline{\quad} \bigcirc \underline{\quad} = \underline{\quad} \text{ (dollars)}$$



Subtraction within 10

- 1 There are 5 . Ada and Amy eat 4 . How many are left?

$$\underline{\quad} \bigcirc \underline{\quad} = \underline{\quad} \text{ (donuts)}$$

- 2 There are 7 . 2 of them fly away. How many are left?

$$\underline{\quad} \bigcirc \underline{\quad} = \underline{\quad} \text{ (balloons)}$$

- 3 A costs \$9. A costs \$4 cheaper than a . How much does a cost?

$$\underline{\quad} \bigcirc \underline{\quad} = \underline{\quad} \text{ (dollars)}$$



Subtraction within 10



4 I am 10 years old. My brother is 3 years younger than me. How old is my brother?

$$\underline{\quad} \bigcirc \underline{\quad} = \underline{\quad} \text{ (years old)}$$



5 There were 7 . My friends ate 6 . How many  were left?

$$\underline{\quad} \bigcirc \underline{\quad} = \underline{\quad} \text{ (cupcakes)}$$

6 My mother bought a  which cost \$4 with a . How much change did she get?

$$\underline{\quad} \bigcirc \underline{\quad} = \underline{\quad} \text{ (dollars)}$$







Addition and Subtraction within 10

1 Tom eats 8 . Jack eats 5 fewer  than Tom. How many  does Jack eat?

_____ ○ _____ = _____ (strawberries)

2 Lily has 2 . She has 2 fewer than Roy. How many  does Roy have?

_____ ○ _____ = _____ (marbles)

3 A  costs \$10. A  costs \$6 more than an . How much does an  cost?

_____ ○ _____ = _____ (dollars)



Addition and Subtraction within 10

4 A  costs \$8. A  costs \$4 more than a . How much does an  cost?

$$\underline{\quad} \bigcirc \underline{\quad} = \underline{\quad} \text{ (dollars)}$$

5 I am 9 years old. I am 3 years older than my cousin. How old is my cousin?

$$\underline{\quad} \bigcirc \underline{\quad} = \underline{\quad} \text{ (years old)}$$



6 I am 2 years old. I am 4 years younger than my sister. How old is my sister?

$$\underline{\quad} \bigcirc \underline{\quad} = \underline{\quad} \text{ (years old)}$$

